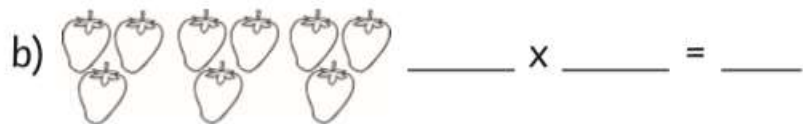


3 Times Table Activities

Count in 3s and colour in the grid:

1	2	3	4	5	6
7	8	9	10	11	12
13	14	15	16	17	18
19	20	21	22	23	24
25	26	27	28	29	30
31	32	33	34	35	36

How many pieces of fruit are there?



Work out these answers:

a) $4 \times 3 =$ _____

b) $3 \times 3 =$ _____

c) $5 \times 3 =$ _____

d) $2 \times 3 =$ _____

e) $9 \times 3 =$ _____

f) $6 \times 3 =$ _____

g) $7 \times 3 =$ _____


h) $1 \times 3 =$ _____

i) $11 \times 3 =$ _____

j) $8 \times 3 =$ _____

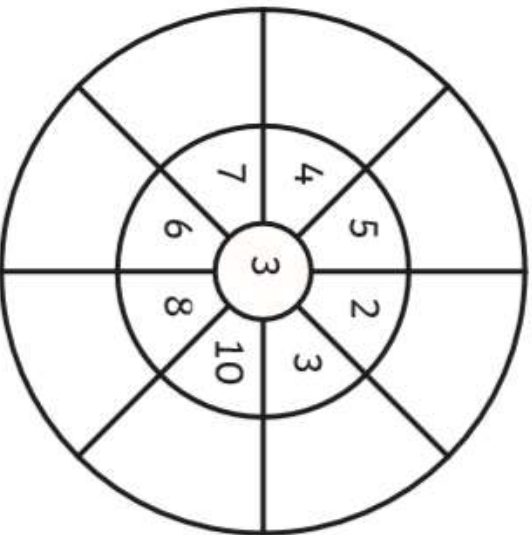
k) $10 \times 3 =$ _____

l) $12 \times 3 =$ _____

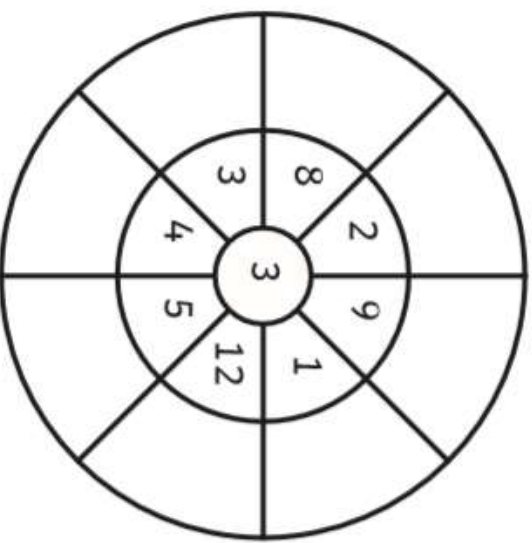


3 Times Table Multiplication Wheels

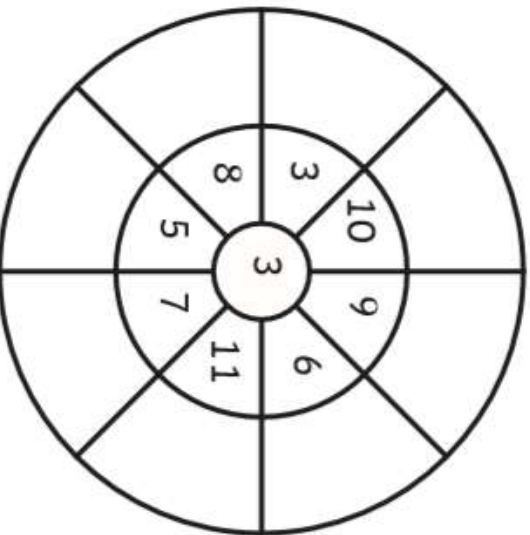
1.



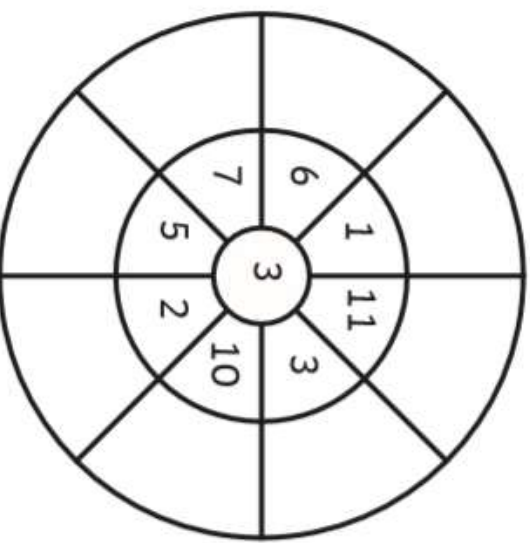
4.



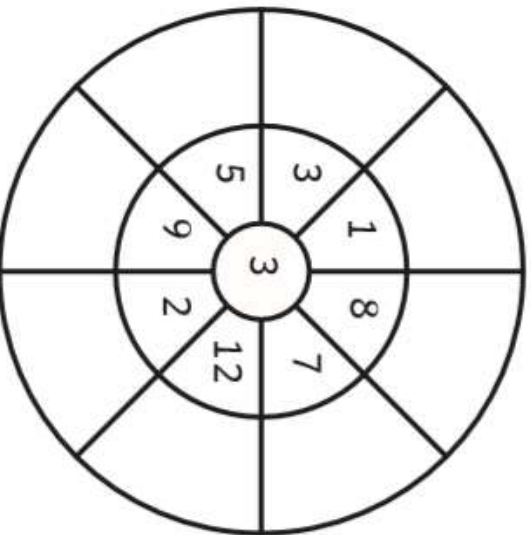
2.



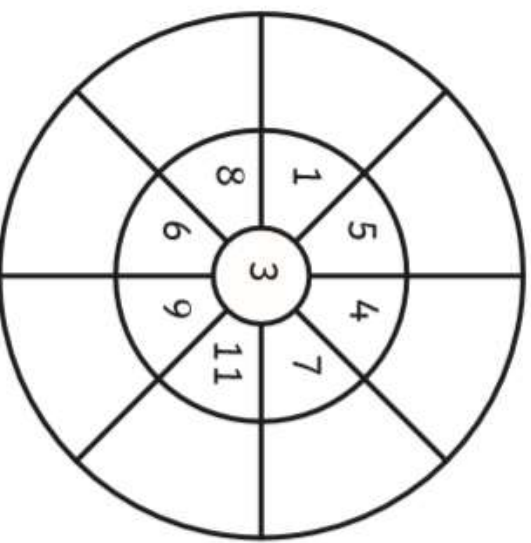
5.



3.



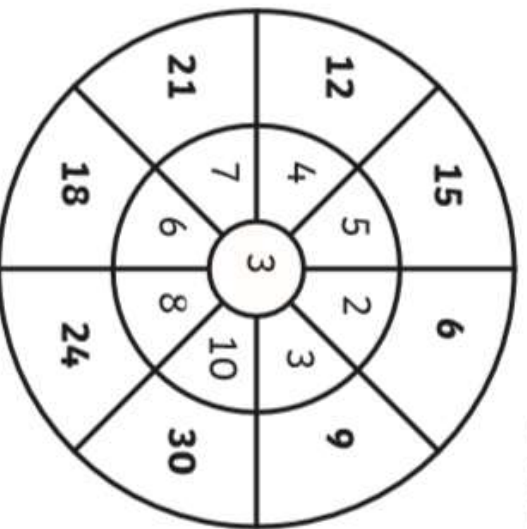
6.



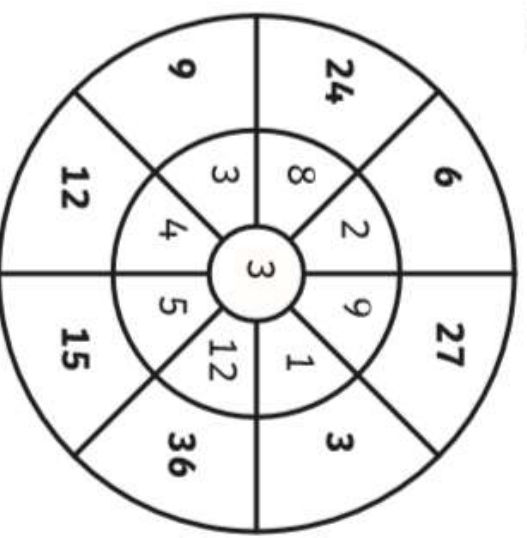
3 Times Table Multiplication Wheels

Answers

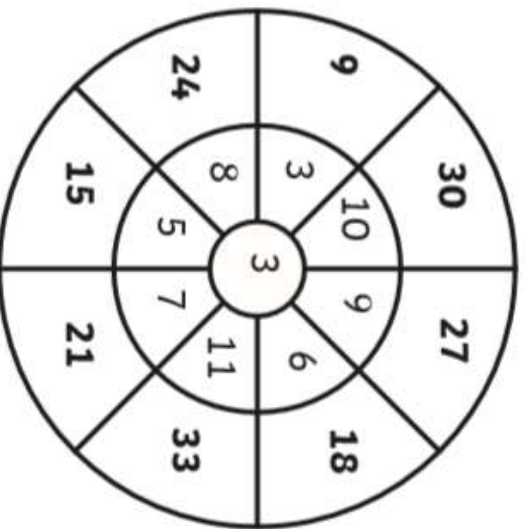
1.



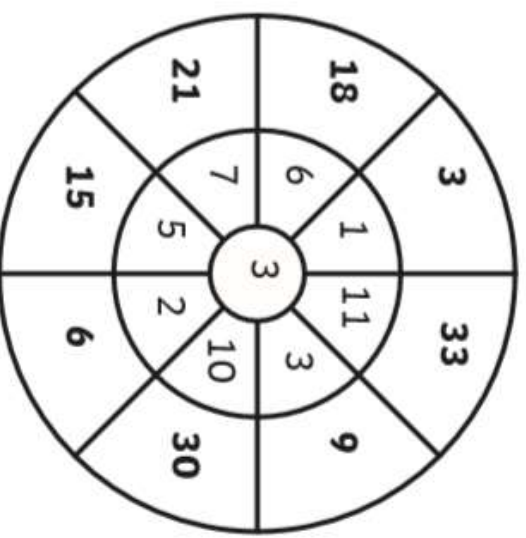
4.



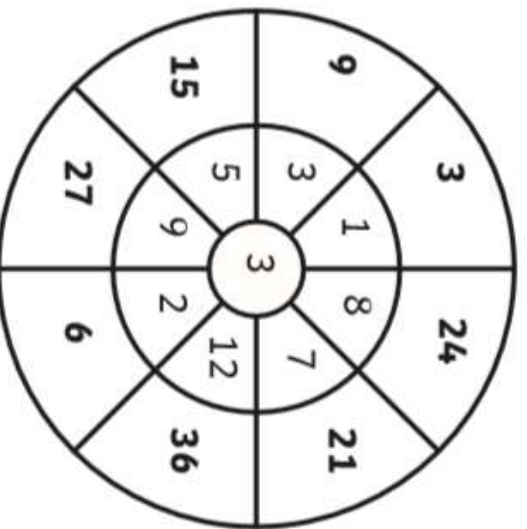
2.



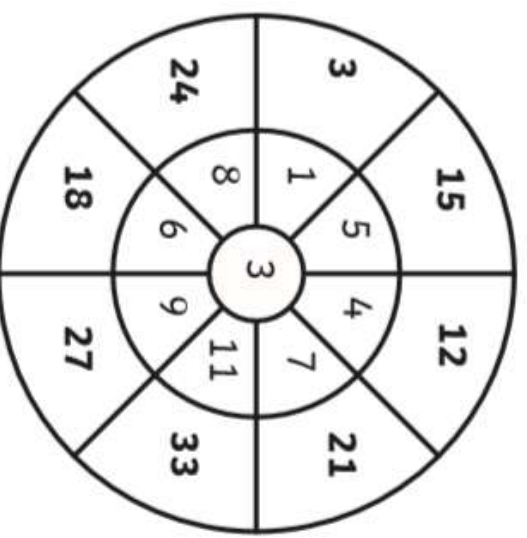
5.



3.



6.




3 Times Table Space Race

Multiply the numbers on the track.

Write them down as you go around.

Use a timer to see how long it takes you to finish the race!



START

12	15	27	30	9	3	18	21
3×4	3×5	3×9	3×10	3×3	3×1	3×6	3×7

x 3

21	3×7	3×11	3×9	3×8	3×5	30	3×10	11	3×11
3×7	3×1	3×11	3×9	3×8	3×5	3×4	3×10	6	3×2
3	3	33	27	24	15	12	21	36	24
21	3×7	3×11	3×9	3×8	3×5	3×4	3×7	3×12	3×8



START